



**MPVM:GANGA GURUKULAM
HOLIDAY HOMEWORK**



Class - 4

List of subjects:

- ❖ *English*
- ❖ *Hindi*
- ❖ *Mathematics*
- ❖ *Science*
- ❖ *SST*
- ❖ *Computer*
- ❖ *Sanskrit*



MPVM:GANGA GURUKULAM

.....
Gaddopur, Phaphamau, Prayagaraj

WEBSITE – www.mpvmgg.com

English

Q1! Fill in the blanks with the correct form of the verbs given in the brackets.

1. Gopi and Hari _____ their homework everyday. (do)
2. Seema _____ her hair every morning. (wash)
3. Many animals _____ in the jungle. (live)
4. A fisherman _____ fish. (catch)
5. The teacher _____ on the blackboard. (write)
6. The sun _____ us light and heat. (give)

Q2. Use the past tense of the verbs in the box to fill in the blanks.

wake	win	teach	sing	fall
dance	steal	hurt	carry	ring.

1. Dad me how to use the computer.



2. The bell loudly.

3. Everyone and at the picnic.

4. The tortoise the race.



5. The player down and his leg.

Q3. Choose the Correct Homophones:-

1. I _____ bread and cheese. (**ate, eight**)
2. The boy _____ his bicycle. (**rode, road**)
3. Did you see the _____ truck? (**toe, tow**)
4. The wind _____ my hair. (**blue, blew**)

Q4. Read the following comprehension and answer:-

The Painted Desert, located in Arizona, covers 93,500 acres and stretches over 160 miles. It is called "painted" because of it has colored rocks that look like they were painted. This colorful desert has cliffs and hills. It also has trees that turned to stone long ago. These trees are located in a place called, "the Petrified Forest."

Directions: Answer each question with a complete sentence.

1. Where is the Painted Desert located?

2. Why is it called "painted"?

3. How many acres of land does it cover?

4. How many miles long is the Painted Desert?

5. Name two things you might see in the Painted Desert.

Q5. Write a story about your day at the farm.

- . Tell about the animals at the farm.
- . Tell about the sound you heard
- . Tell about the things you did.



Q6. Write a short story told by your grandparents.

- . Write and learn all the work done in Eng. Lit. and Eng. Lang. book and notebook.

Hindi

- हिन्दी पाठ्यपुस्तक मधुप से “ हिंद देश के निवासी” कविता याद करो ।
 - हिन्दी साहित्य तथा व्याकरण पुस्तक और अभ्यास पुस्तिका में कराया गया सब कार्य लिख - लिखकर याद करो ।
१. कोष्ठक में दिए गए शब्दों को भाववाचक संज्ञाओं में बदलकर रिक्त स्थानों में भरें-

- (क) मोहन ने अपना कार्य से किया। (ईमानदार)
- (ख) बीमारी का घर है। (बूढ़ा)
- (ग) युद्ध में सैनिक बहुत से लड़े। (वीर)
- (घ) सोहन में होशियार है। (पढ़ना)
- (ङ) हिमालय की संसार में सबसे अधिक है। (ऊँचाई)
- (च) ताजमहल की सबको अपनी ओर आकर्षित करती है। (सुंदर)

२. निम्नलिखित वाक्यों में विशेषण और विशेष्य छाँटकर अलग करो

- (क) अंगूर खट्टे हैं।
- (ख) रंग -बिरंगी तितलियाँ फूलों पर म मँडरा रही थीं।
.....
- (ग) पलक झपकते ही सफ़ेद घोड़ा हवा से बातें करने लगा ।
.....
- (घ) सुनहरा हिरन जंगल में लुप्त हो गया ।
- (ङ) मुझे लाल गुलाब अच्छा लगता है।

3. निम्नलिखित वाक्यों में क्रिया के भेद का नाम लिखो -

- (क) अँगना नृत्य कर रही है।
- (ख) माँ ने बच्चे को नहलाया।
- (ग) बादल गरजे।
- (घ) पक्षी आसमान में उड़ते हैं।
- (ङ) मोर नाचा।
- (च) मैंने समाचार पत्र पढ़ा।

4. दिए गए वाक्यों में मुहावरों के गलत प्रयोग को शुद्ध करके लिखो -

- (क) युद्ध में भारतीय सैनिकों ने दुश्मनों की ईट से ईट जमा दी।
.....
- (ख) दिनभर परिश्रम करने के बाद मेरा अंग-अंग कस गया।
.....
- (ग) पुलिस को धोखा देकर चोर उन्नीस-बीस हो गया।
.....
- (घ) पलक झपकते ही राणा प्रताप का घोड़ा पवन से बातें करने लगा।
.....
- (ङ) हिमालय पर्वत की चोटियाँ गगन से बातें करती हैं।
.....

5. निम्नलिखित शब्दों के तीन-तीन पर्यायवाची शब्द उसके सामने खाली जगह में लिखो -

- (क) घोड़ा -
- (ख) सूर्य -
- (ग) राजा -
- (घ) देश -
- (ङ) माता -

6. रेखांकित शब्दों के विलोम शब्द लिखकर वाक्य पूर्ण करो -

- (क) दूसरों के दोष निकालने की जगह उनके की ओर ध्यान देना चाहिए।
- (ख) इस प्रश्न संक्षिप्त में दें।
- (ग) हमेशा सत्य का साथ देना चाहिए, का नहीं।
- (घ) विद्वानों की संगत में रहकर भी बुद्धिमान हो जाते हैं।

- ग्रीष्म ऋतु पर आठ से दस पंक्तियों का एक अनुच्छेद लिखो

Maths

1 Write the number names of the given numbers.

- a. 7000 : _____
- b. 1094 : _____
- c. 5786 : _____
- d. 2245 : _____

2 Write the numerals for the following.

- a. Five thousand six hundred sixty
- b. Nine thousand five hundred forty-seven
- c. One thousand twelve
- d. Five thousand fifty

3. Solve the following :

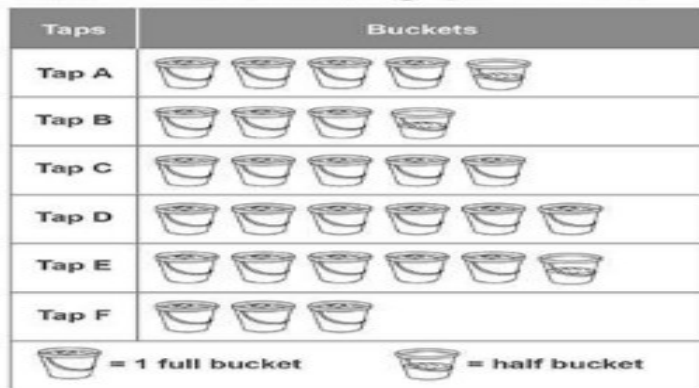
- _____ \times 10 = 150
- $72 \div$ _____ = 8. What is the missing number?
- If you add 1000 to 29800, you obtain _____
- 360 when divided by 4 gives _____
- What is 121 times 11? _____
- At a birthday party you counted 60 eyes. How many people were at the party? _____
- How many weeks are there in 56 days? _____
- Jonny used the rule 'double the number' to create the pattern below. What are the next numbers? 6, 12, 24, _____, _____, _____

4. Fill in the blanks:-

<p>A)</p> $\begin{array}{r} 5 \square \square \square 6 2 0 \\ + \quad \quad 5 4 3 \square \\ \hline \square 4 9 8 \square \square 5 \end{array}$	<p>B)</p> $\begin{array}{r} \square \square \square \square 1 \\ + \quad 2 4 9 1 8 \\ \hline 1 0 0 3 5 \square \end{array}$	<p>C)</p> $\begin{array}{r} \square \square \square 0 8 \square 2 \\ + \quad \quad 5 \square 8 \square \\ \hline 1 2 3 \square 0 7 9 \end{array}$
---------------------------------------------------------------------------------------------------------------------------------------------------	-----------------------------------------------------------------------------------------------------------------------------	---------------------------------------------------------------------------------------------------------------------------------------------------

5.

The following graph shows the number of buckets filled in 2 hours from different taps. Read the graph carefully and answer the following questions.



In which tap water flows the fastest ?

Tap D

a) How many buckets of water is collected by tap F in 3 hours ?


b) If one full bucket is equal to 10L, how much water is collected from tap B ?

c) Which tap gives half the water as per given by tap D ?

d) Arrange the taps in ascending order, according to the quantity of water collected by them.

, , , , ,

6. Multiply the numbers on the petal opposite to each other, they will be same and equal to the number in the middle. Can you find all the missing numbers ?



7. Revise all the work done in your notebook and book and learn the tables from 2 to 20.

8. Do all the exercises of Ch 1 Looking Back in the book itself.

E V S

S.S.T.

Q1. Learn about your state by researching answers to the questions below-

- (i) What are some popular landmarks or monuments located in your state? Name the ones you have visited.
- (ii) Are there any agricultural items your state is known for? List them.
- (iii) Which are the Major Rivers flowing through Uttar Pradesh?
- (iv) Who were the Two Former Female Chief Ministers of Uttar Pradesh?

Q2. Take a newspaper and mark the time of sunrise and sunset of seven days. Make columns to write down the date and time.

You can take example from the table below-

Date	Time- Sunrise	Time- Sunset
22/4/2022	5:05 a.m.	6:25 p.m.

Q3. Fill in the space provided-

States	Capitals
i. Gujarat	i.
ii. Madhya Pradesh	ii.
iii. Uttarakhand	iii.
iv.	iv. Bhubaneshwar
v.	v. Kohima

Q4. Take any three countries from three different continents. Write the following details about them-


Name of the country	Name of the continent	Capital	Currency
i.			
ii.			
iii.			
iv.			

Q5. Make a globe using a ball/balloon, colours, a map etc. Make Equator, Prime Meridian on the globe by using thread/wool.

- Write and learn all the work done in your Social Studies book & notebook.

Science

1. Choose any one place where plants grow (e.g, plains, mountains ,deserts areas of heavy rainfall etc). Collect pictures of plants that grow there and paste them on a separate sheet of paper and list their characteristics.
2. Take two potted green plants . Keep one green plant in a closed dark place and the other one green plant in your garden or open space for one week. Observe both the plants after one week and write your observation on a separate sheet of paper.
3. What do you think would happen if there were no plants on the Earth?
4. Draw a well labelled diagram of simple food chain on a A4 sheet.
5. Make a model on life cycle of butterfly using different materials.
(Colourful paper, cardboard, cotton etc)
6. Unjumble names of plants given below . Where does it grow? Give one feature that helps the plant to survive in that place.



1. C T A U C S :- _____

It grows on the _____

Feature: _____

2. G L M H O R U A :- _____

It grows on the _____

Feature: _____

7. Learn all the definitions, exercises and Q/ Ans of L 17 and 18 Read the chapter, summary and worksheet given in your book and notebook. Practise all the diagrams of both the chapters.

Computer

1. Fill in the blanks:-

- a) A computer works on the principle of INPUT – PROCESS – _____.
- b) _____ are the parts of a computer that you can touch and feel.
- c) Keyboard , mouse and scanner are _____ devices of a computer.
- d) The CPU has three main parts : 1. ALU 2. CU 3. _____.
- e) Monitor, Speakers , Printer are _____ storage devices.
- f) Computer hardware cannot work by itself. They need _____.

2. Write the full forms of the following:

- a) I S P _____
- b) W W W _____
- c) H T M L _____
- d) U R L _____

3. In today's world we are getting the printout of the bills with the help of a computer. Name the device which helps us to scan the cost to get the printout of the bills. Paste the picture of the device which helps us to scan the bills. Collect and paste any two bills below , in it circle the bar code and also write the name of the places from where these bills have been taken.

4. Draw and Name any two Web Browser and colour it.

5. Identify these devices , Label them and also write which kind of devices are each one of them(INPUT – PROCESS – OUTPUT) :-



Sanskrit

- अपनी पाठ्य पुस्तक संस्कृत मित्रम् तथा अभ्यास पुस्तिका में कराया गया सब कार्य ध्यानपूर्वक लिख - लिखकर याद करो ।
- विद्यालय प्रार्थना में गाए जाने वाले सभी श्लोकों को कंठस्थ करो ।
- शब्द रूप तथा धातु रूप लिख - लिखकर याद करो ।

१. दिए गए वर्णों का विश्लेषण करो -

- i-आसन्दिका: -आ + स् + अ + न् + द् + इ + क् + आः
- ii_ श्यामपट्टः _
- iii_ सुधाखण्डम् _
- iv_ अध्यापिका _
- v_ कार्पाटिका _
- vi_ यन्त्रम् _

२. वर्णों का संश्लेषण करिए -

- i-म् अ न् द् इ र् अः -
- ii-प् र् अ त् इ म् आः -
- iii-अ न् उ क् अ म् प् आ -
- iv-प् उ र् औ ह् इ त् अः -
- v-भ् अ क् त् आः -
- vi-न् ऋ त् य अः -

३ . संयुक्त वर्ण को अलग करके लिखिए और उसके उदाहरण में रिक्त स्थान को पूर्ण करिए

i-क्ष= क् + ष् +अ कक्षा = क् + अ + क् + ष् + आ

ii - त्र = छात्रः =

iii - क्र = क्रीडा =

iv - ज्ञ = ज्ञानी =

४ . निम्नलिखित वर्णों से प्रारंभ होने वाले दो - दो संस्कृत शब्द लिखो -

(क) ख - खगः खर्बुजम्

(ख) क -

(ग) ल -

(घ) न -



HAPPY
SUMMER
HOLIDAYS

